

科目：普通物理(3002)

校系所組：中大照明與顯示科技研究所甲組、天文研究所

交大電子物理學系丙組、物理研究所

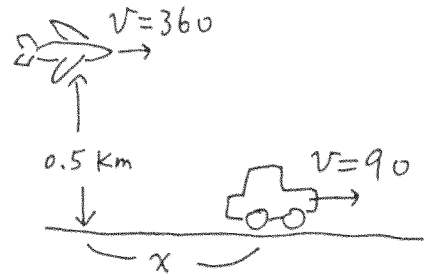
清大物理學系、先進光源科技學位學程物理組、天文研究所

陽明生醫光電研究所理工組 A

共 40 題, 每題配分 2.5 分

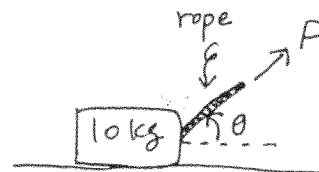
1. Given the velocity of a car in two dimensions: $\vec{v}(t) = (t^2 - 1, 3)$. The car starts out at position $(x, y) = (2, 4)$ at $t = 0$. What is the car at $t = 3$?
 (a) (6,9), (b) (8,3), (c) (10,7), (d) (8,13), (e) none of the above.

2. An airplane flies at an altitude of 0.5 km and a speed of 360 km/h. At what horizontal distance x should it release a bomb to hit a target that is moving with constant velocity 90 km/h?
 (Approximate the gravitational acceleration g by 10 m/s^2 throughout this test)
 (a) 500, (b) 750, (c) 250, (d) 1000,
 (e) none of the above.



3. A boy wishes to row across a river in the shortest possible time. He can row at 2 m/s in still water and the river is flowing at 1 m/s. At what angle with respect to the water velocity should he point the bow (the front of the boat)?
 (a) 30° , (b) 45° , (c) 60° , (d) 90° , (e) none of the above.
4. Two blocks of mass 25 kg and 75 kg are connected by a light rope across a fixed pulley of radius 50 cm and moment of inertia $I = 10 \text{ kg} \cdot \text{m}^2$. Assume that the rope never slips. What is the magnitude of the acceleration of the 75 kg block?
 (a) 0.54 m/s^2 , (b) 0.1 m/s^2 , (c) 0.049 m/s^2 , (d) 0.8 m/s^2 , (e) none of the above.

5. A rope is used to pull a 10 kg box with constant velocity across the floor with coefficient of kinetic friction $\mu_k = 1/\sqrt{3}$. At what angle (in degrees) is the force F least?
 (a) 30, (b) 45, (c) 60, (d) 0, (e) none of the above.



6. My weight is mg and the maximum speed my jump is v_0 . If I jump off a cart of mass M that can move without friction, what is my maximum horizontal displacement via adjusting the angle of my jump? Note that v_0 is now measured relative to the car.



- (a) $\frac{Mv^2}{mg}$, (b) $\frac{mv^2}{Mg}$, (c) $\frac{(M+m)v^2}{mg}$, (d) $\frac{(M-m)v^2}{Mg}$, (e) none of the above.

注意：背面有試題

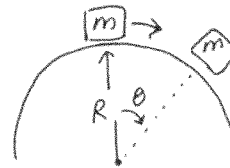
科目：普通物理(3002) 校系所組：中大照明與顯示科技研究所甲組、天文研究所

交大電子物理學系丙組、物理研究所

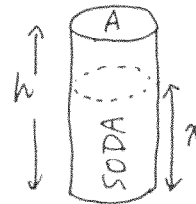
清大物理學系、先進光源科技學位學程物理組、天文研究所

陽明生醫光電研究所理工組 A

7. An object of mass m that is initially at rest slides down from the top of a smooth sphere (of radius R). If the size of the object is negligible, at what angle θ will it detach from the sphere?
 (a) $\cos\theta = 1/2$, (b) $\sin\theta = 1/2$, (c) $\sin\theta = 2/3$,
 (d) $\cos\theta = 2/3$, (e) none of the above.

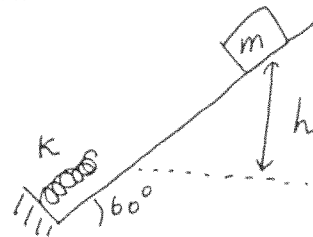


8. A uniform soda can of base area $A = 12 \text{ cm}^2$, mass $m = 10 \text{ g}$ and height $h = 20 \text{ cm}$ is filled with soda of density $\rho = 1 \text{ g/cm}^3$. Use x to denote the height of the remaining soda; find the x that makes the center of mass of the whole system the lowest. It occurs when the soda is
 (a) half-filled, (b) less than half, but more than a quarter filled,
 (c) less than a quarter filled, (d) completely empty, (e) none of the above.

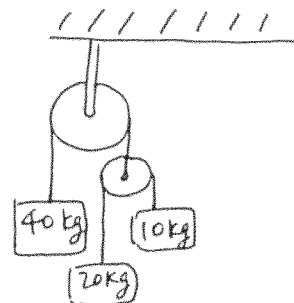


9. A 10 kg monkey climbs up a light rope that runs over a frictionless tree limb and back down to a 20 kg package on the ground. What is the least acceleration the monkey must have if it is to lift the package off the ground?
 (a) $g/4$, (b) $g/2$, (c) g , (d) $2g$, (e) none of the above.

10. A block of mass $m = 10 \text{ kg}$ slides from vertical height $h = 1 \text{ m}$ down a slope of angle $\theta = \pi/3$ and kinetic friction coefficient $\mu_k = 0.5$. At the foot of the slope lies a spring of constant $K = 200 \text{ nt/m}$. What is the maximum compression of the spring?
 (a) 1, (b) 1.5, (c) 2, (d) 2.5, (e) none of the above.



11. Three masses are connected by two pulleys as shown in the figure. Find the acceleration of the 10 kg mass?
 (a) 6, (b) 4, (c) 2, (d) 1, (e) none of the above.



12. How much gravitational potential energy is stored in a uniform solid sphere of mass M and radius R ? (Use G to denote the gravitational constant).
 (a) GM/R , (b) GM^2/R , (c) $2GM^2/R$, (d) $2GM^2/5R$, (e) none of the above.

注意：背面有試題

科目：普通物理(3002)

校系所組：中大照明與顯示科技研究所甲組、天文研究所

交大電子物理學系丙組、物理研究所

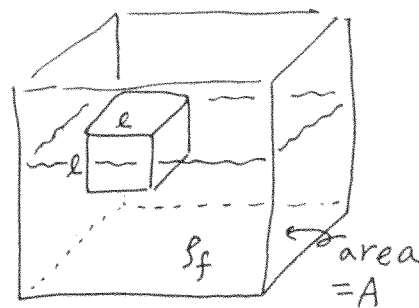
清大物理學系、先進光源科技學位學程物理組、天文研究所

陽明生醫光電研究所理工組 A

13. A bowler throws a bowling ball of radius R and mass M (and moment of inertia $I = 2MR^2/5$) along a lane. The ball slides on the lane with initial speed v_0 and initial angular speed ω_0 . The coefficient of kinetic friction between the ball and the lane is μ_k . How long does it take before the ball rolls without slipping?

- (a) $\frac{2(v_0 + R\omega_0)}{5g\mu_k}$, (b) $\frac{2(v_0 - R\omega_0)}{5g\mu_k}$, (c) $\frac{2(v_0 + R\omega_0)}{7g\mu_k}$, (d) $\frac{2(v_0 - R\omega_0)}{7g\mu_k}$, (e) none of the above.

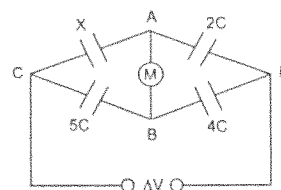
14. A cubic block of size ℓ and density ρ floats in a container of base area A which is filled with fluid of density ρ_f . If I tap the block on the top surface, it will oscillate up and down. What will be the period of this simple harmonic motion?



- (a) $2\pi\sqrt{\frac{\ell\rho}{g\rho_f}}$, (b) $2\pi\sqrt{\frac{\ell\rho_f}{g\rho}}$, (c) $2\pi\sqrt{\frac{(A-\ell^2)\ell\rho}{Ag\rho_f}}$,

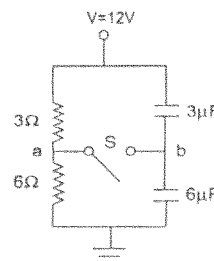
- (d) $2\pi\sqrt{\frac{(A-\ell^2)\ell\rho_f}{g\rho}}$, (e) none of the above.

15. Four capacitors are arranged as shown in the right figure. A potential difference ΔV is applied between the terminal C and D. A voltmeter M is connected between A and B. What is the capacitance of capacitor X such that the meter reads zero?



- (a) $5C/2$ (b) $8C/5$ (c) $20C/11$ (d) $1C$ (e) $20C$.

16. What is the potential of point a with respect to point b in the right figure when switch S is open? (a) $-4V$ (b) $4V$ (c) $8V$ (d) $0V$ (e) $2V$.



注意：背面有試題

科目：普通物理(3002) 校系所組：中大照明與顯示科技研究所甲組、天文研究所

交大電子物理學系丙組、物理研究所

清大物理學系、先進光源科技學位學程物理組、天文研究所

陽明生醫光電研究所理工組 A

17. A parallel-plate capacitor has space between the plates filled with four slabs of dielectric. The dielectric constant of each slab is indicated in the figure below on the next page. Each slab has thickness $d/2$, where d is the plate separation. What is the capacitance of the parallel-plate capacitor?

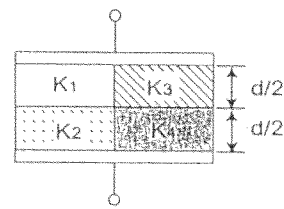
(a) $C = \frac{2\epsilon_0 A}{d} (K_1 + K_2 + K_3 + K_4)$

(b) $C = \frac{\epsilon_0 A}{d} \left(\frac{(K_1 + K_2)(K_3 + K_4)}{K_1 + K_2 + K_3 + K_4} \right)$

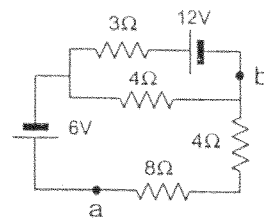
(c) $C = \frac{2\epsilon_0 A}{d} \left(\frac{K_1 K_2}{K_1 + K_2} + \frac{K_3 K_4}{K_3 + K_4} \right)$

(d) $C = \frac{2\epsilon_0 A}{d} \left(\frac{K_1 K_3}{K_1 + K_3} + \frac{K_2 K_4}{K_2 + K_4} \right)$

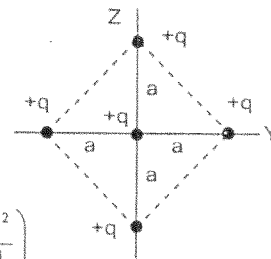
(e) $C = \frac{\epsilon_0 A}{d} \left(\frac{K_1 K_2}{K_1 + K_2} + \frac{K_3 K_4}{K_3 + K_4} \right)$



18. For the circuit shown on the right, what is the potential difference between points a and b? (a) 11.25V (b) 6V (c) 0.75V (d) 5.25V (e) 18V

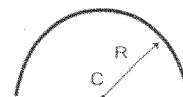


19. Five equal positive point charges q are fixed at coordinate $(0,0)$, $(0,+a)$, $(0,-a)$, $(+a,0)$ and $(-a,0)$ on the Z,Y coordinate system as shown. What is the electric potential at point along the Y -axis if y is very large compared with a ?



- (a) $\frac{1}{4\pi\epsilon_0} \left(\frac{5q}{y} + \frac{qa^2}{y^3} \right)$ (b) $\frac{1}{4\pi\epsilon_0} \left(\frac{4q}{y} - \frac{qa^2}{y^3} \right)$ (c) $\frac{1}{4\pi\epsilon_0} \left(\frac{5q}{y} - \frac{qa^2}{y^3} \right)$
 (d) $\frac{1}{4\pi\epsilon_0} \left(-\frac{4q}{y} - \frac{qa^2}{y^3} \right)$ (e) $\frac{1}{4\pi\epsilon_0} \left(\frac{5q}{y} - \frac{qa^2}{2y^3} \right)$

20. A thin plastic rod has uniform linear positive charge density λ distributed along a semicircular arc of radius R . What is the magnitude of the electric field at the center of the arc?



- (a) $\frac{\lambda}{4\pi\epsilon_0 R}$ (a) $\frac{\lambda}{2\pi\epsilon_0 R}$ (a) $\frac{\lambda}{4\pi\epsilon_0 R^2}$ (a) $\frac{\lambda}{\pi\epsilon_0 R}$ (a) $\frac{\lambda}{4\epsilon_0}$

注意：背面有試題

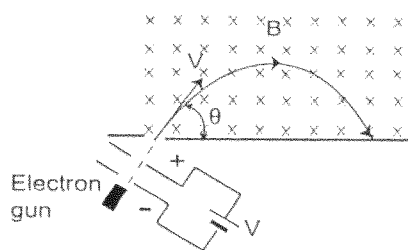
科目：普通物理(3002) 校系所組：中大照明與顯示科技研究所甲組、天文研究所

交大電子物理學系丙組、物理研究所

清大物理學系、先進光源科技學位學程物理組、天文研究所

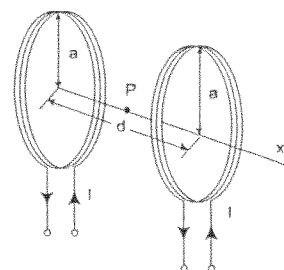
陽明生醫光電研究所理工組 A

21. A particle with mass m and charge q emerging from the gun with a velocity V makes an angle θ with the axis as shown. There is a uniform magnetic field B parallel to the axis, so the trajectory of the particle will be a helix. What is the time for the particle to touch the axis again?



- (a) $\frac{m\theta}{qB \sin \theta}$ (b) $\frac{2m\theta}{qB \sin \theta}$ (c) $\frac{2m\theta}{qB}$ (d) $\frac{m\theta}{qB}$ (e) $\frac{2\pi m}{qB}$

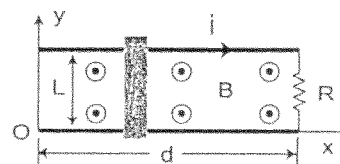
22. Two circular coils with radius a , each of N turns, are separated by a distance d . Each coil carries a current I circulating in the same direction. What is the magnetic field in the midway point on the axis between the coils?



- (a) $\frac{\mu_0 N I a^2}{2 \left[\left(\frac{d}{2} \right)^2 + a^2 \right]^{3/2}}$ (b) $\frac{\mu_0 N I a^2}{\left[\left(\frac{d}{2} \right)^2 + a^2 \right]^{3/2}}$ (c) 0
 (d) $\frac{\mu_0 N I a^2}{\left[d^2 + a^2 \right]^{3/2}}$ (e) $\frac{\mu_0 N I a}{\left[\left(\frac{d}{2} \right)^2 + a^2 \right]^{1/2}}$

23. Two parallel conducting rails with width L and length d and a conducting sliding bar in a sinusoidal varying magnetic field $\vec{B} = B_0 \cos \omega t \hat{z}$. The position of the sliding bar is given by $x = \frac{d}{2}(1 - \sin \omega t)$. What is the current through R ?

- (a) $\frac{-B_0 L d}{2R} (\sin \omega t + \cos 2\omega t)$
 (b) $\frac{-B_0 L d}{R} (-\sin \omega t + \cos 2\omega t)$
 (c) $\frac{-B_0 L d}{2R} (-\sin \omega t + \omega \cos 2\omega t)$
 (d) $\frac{-B_0 L d}{2R} \left(\cos \omega t + \frac{1}{2} \sin 2\omega t \right)$
 (e) $\frac{-B_0 L d}{2R} (\cos \omega t + \omega \cos 2\omega t)$



注意：背面有試題

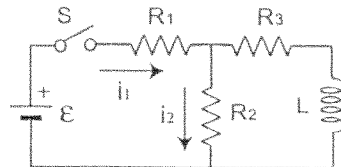
科目：普通物理(3002) 校系所組：中大照明與顯示科技研究所甲組、天文研究所

交大電子物理學系丙組、物理研究所

清大物理學系、先進光源科技學位學程物理組、天文研究所

陽明生醫光電研究所理工組 A

24. Consider the circuit shown on the right. The circuit elements have following values: $\varepsilon=10\text{V}$, $R_1=10\Omega$, $R_2=20\Omega$, $R_3=30\Omega$, $L=8\text{H}$. Switch S is closed at time $t=0$. What are the initial currents i_1 and i_2 ? (a) $i_1=0.45\text{ A}$, $i_2=0.27\text{ A}$ (b) $i_1=0.45\text{ A}$, $i_2=0.18\text{ A}$ (c) $i_1=0.33\text{ A}$, $i_2=0.19\text{ A}$ (d) $i_1=0.45\text{ A}$, $i_2=0.45\text{ A}$ (e) $i_1=0.33\text{ A}$, $i_2=0.33\text{ A}$.



25. For a monochromatic electromagnetic plane wave of amplitude E_0 , frequency ω , and phase angle θ that is traveling in the positive x-direction and polarized in the y-direction, what is the electric and magnetic field of the wave?

(a) $\vec{E}(x,t) = E_0 \cos\left(\frac{\omega}{c}x + \omega t + \theta\right)\hat{z}$, $\vec{B}(x,t) = \frac{E_0}{c} \cos\left(\frac{\omega}{c}x + \omega t + \theta\right)\hat{y}$

(b) $\vec{E}(x,t) = E_0 \cos\left(\frac{\omega}{c}x + \omega t + \theta\right)\hat{y}$, $\vec{B}(x,t) = \frac{E_0}{c} \cos\left(\frac{\omega}{c}x + \omega t + \theta\right)\hat{z}$

(c) $\vec{E}(x,t) = -E_0 \cos\left(\frac{\omega}{c}x + \omega t + \theta\right)\hat{x}$, $\vec{B}(x,t) = \frac{E_0}{c} \cos\left(\frac{\omega}{c}x + \omega t + \theta\right)\hat{z}$

(d) $\vec{E}(x,t) = E_0 \cos\left(\frac{\omega}{c}x + \omega t + \theta\right)\hat{z}$, $\vec{B}(x,t) = \frac{E_0}{c} \cos\left(\frac{\omega}{c}x + \omega t + \theta\right)\hat{y}$

(e) $\vec{E}(x,t) = E_0 \cos\left(\frac{\omega}{c}x + \omega t + \theta\right)\hat{y}$, $\vec{B}(x,t) = cE_0 \cos\left(\frac{\omega}{c}x + \omega t + \theta\right)\hat{z}$

26. The electric field of a plane electromagnetic wave in vacuum is represented by

$$E_x = E_z = 0, E_y = 0.5 \cos\left[2\pi \times 10^8 \left(t - \frac{x}{c}\right)\right] \text{ NC}^{-1}$$

Which of the following statement is incorrect?

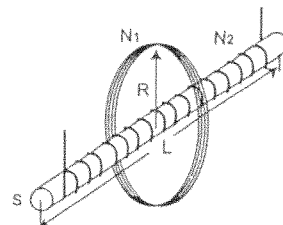
(a) The wavelength is 3m. (b) It is a linear polarized wave.

(c) The wave travels out +x axis. (d) $B_y = \hat{z} \left(-\frac{0.5}{c}\right) \cos\left[2\pi \times 10^8 \left(t - \frac{x}{c}\right)\right]$

(e) The average intensity is $5.3 \times 10^{-4} \text{ Wm}^{-2}$.

(vacuum permittivity $\varepsilon_0 = 8.85 \times 10^{-12} \text{ Wm}^{-2}$)

27. A coil with N_1 turns and radius R is placed around a very long solenoid with cross section S and N_2 turns. The windings of the solenoid have length L. What is the mutual inductance of the system?



- (a) $\frac{1}{L} \mu_0 S N_2$ (b) $\frac{\mu_0 S N_1 N_2}{\pi R^2}$ (c) $\frac{1}{L} \mu_0 S N_1 N_2$ (d) $\mu_0 S N_1 N_2$ (e) $\frac{1}{LS} \mu_0 \pi R^2 N_1 N_2$

注意：背面有試題

科目：普通物理(3002)

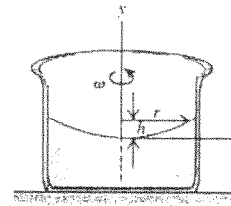
校系所組：中大照明與顯示科技研究所甲組、天文研究所

交大電子物理學系丙組、物理研究所

清大物理學系、先進光源科技學位學程物理組、天文研究所

陽明生醫光電研究所理工組 A

28. A cylindrical container of an incompressible liquid with density ρ rotates with constant angular speed ω about its axis of symmetry, which we take to be the y -axis. The gravitational acceleration is g . The surface height h of the liquid is given by:



- (a) $\omega^2 r^2 / 2g$. (b) $\omega^2 r^2 / g$. (c) $\omega^2 r^2 / 2g\rho$.
 (d) $\omega^2 r^2 / g\rho$. (e) none of the above.

29. After going through a free expansion, the temperature of a real gas whose intermolecular interaction is an attractive force would

- (a) remain the same (b) increase (c) decrease. (d) not be definable. (e) be arbitrary.

30. For an infinitesimal reversible process of a thermodynamic system, which of the following statement is not true?

- (a) $dU = C_v dT - pdV$. (b) $dU = TdS - pdV$. (c) $dS > 0$.

- (d) There can not be any frictional force.

- (e) there is no heat exchange between the system and an thermal bath with a finite temperature difference.

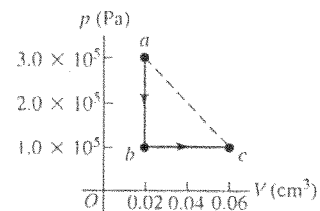
31. For an ideal gas in thermal equilibrium, which of the following statement is true?

- (a) $v_{av} < v_{mp} < v_{rms}$. (b) $v_{mp} < v_{av} < v_{rms}$. (c) $v_{rms} < v_{av} < v_{mp}$. (d) $v_{rms} < v_{mp} < v_{av}$.

- (e) None of the above. (We define v_{av} , v_{mp} , and v_{rms} to be the average, the most probable, and the root-mean-square speeds of the gas respectively.)

32. A volume of air (assumed to be an ideal gas)

undergoes the thermodynamic process, as shown by the path abc in the figure. What is the ratio of T_c to T_a ? How much heat does the air exchange with its surroundings during the process abc ?



The answers to these two questions are:

- (a) 1.0 and 8.0 kJ. (b) 1.0 and 4.0 kJ. (c) 3.0 and 8.0 kJ.
 (d) 3.0 and 4.0 kJ. (e) none of the above.

注意：背面有試題

科目：普通物理(3002) 校系所組：中大照明與顯示科技研究所甲組、天文研究所

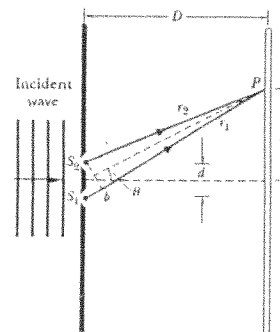
交大電子物理學系丙組、物理研究所

清大物理學系、先進光源科技學位學程物理組、天文研究所

陽明生醫光電研究所理工組 A

33. A thermally insulated chamber has two equal-volume compartments with a movable insulated partition in between. Initially one compartment contains two moles of helium gas at $T = 100$ K, and the other compartment contains one mole of argon gas at $T = 400$ K. Assume that both gases can be considered ideal gas. What is the total change of entropy of the system after the compartment has been removed and the gases have reached a new equilibrium?
 (a) $1.5R\ln 2$. (b) $3R\ln 2$. (c) $4.5R\ln 2$. (d) $6R\ln 2$. (e) none of the above.
34. The speed of sound in a stationary air is 340 m/s. A police car with its 300-Hz siren turned on is moving toward a wall at 180 km/hour. The frequency of the reflected wave that the driver of the car hear is: (a) 403 Hz. (b) 223 Hz. (c) 344 Hz. (d) 351 Hz. (e) none of the above.
35. A police uses a radar gun of frequency f_0 to measure an approaching car moving at a speed of v . The frequency of the reflected beam measured by the police is:
 (a) $\sqrt{(c-v)/(c+v)}f_0$. (b) $\sqrt{(c+v)/(c-v)}f_0$. (c) $f_0(c-v)/(c+v)$.
 (d) $f_0(c+v)/(c-v)$. (e) none of the above.
36. A plane wave of monochromatic light is incident on an opaque metal sheet with four equally-spaced narrow slits. If the incident angle is slanted so that $\phi = n\pi/2$ is the phase difference between adjacent slits, and n is an integer. The center line at a far away screen parallel to the sheet is:
 (a) a bright line. (b) a dark line. (c) half way between a bright line and a dark line.
 (d) a major bright line if n is a multiple of 4 and a minor bright line otherwise.
 (e) a bright line if n is a multiple of 4 and a dark line otherwise.

37. Slits of unequal widths are used in a double-slit arrangement to produce an interference pattern on a distant screen. If only the narrower slit S_1 is illuminated with monochromatic light of wavelength λ , the center of the pattern on the screen has amplitude E_0 and intensity I_0 . If only the wider slit S_2 is illuminated, the amplitude of the light at the center of the pattern is $2E_0$. In the figure on the right, $d \ll D$. The widths of the slits are



注意：背面有試題

科目：普通物理(3002) 校系所組：中大照明與顯示科技研究所甲組、天文研究所

交大電子物理學系丙組、物理研究所

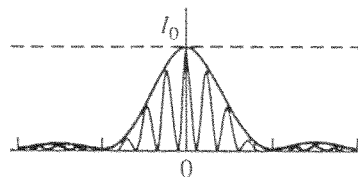
清大物理學系、先進光源科技學位學程物理組、天文研究所

陽明生醫光電研究所理工組 A

much less than λ such that it is no need to consider the single-slit diffraction envelope. When both slits are illuminated, the normalized intensity pattern $I(\theta) / I_0$ as a function of θ on a far away screen is:

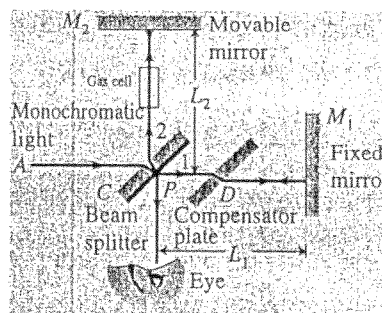
- (a) $(5 + 4 \cos(2\pi d \sin \theta / \lambda))$. (b) $(4 + 5 \cos(2\pi d \sin \theta / \lambda))$.
 (c) $(3 + 2 \cos(2\pi d \sin \theta / \lambda))$. (d) $(2 + 3 \cos(2\pi d \sin \theta / \lambda))$. (e) none of the above.

38. An Ar-laser of $\lambda = 540 \text{ nm}$ is used to illuminate two slits of finite width a . The center-to-center distance between the slits is d . A diffraction pattern, shown in the figure, is observed on a screen 6.0 m away. The distance between two adjacent interference maxima is 3.0 mm. The values of d and a in units of mm are:



- (a) 0.27 and 0.14. (b) 0.54 and 0.14. (c) 1.08 and 0.54. (d) 1.08 and 0.27.
 (e) none of the above.

39. Linda uses a Michelson interferometer with the 606-nm light from a krypton-86 lamp and she places a gas cell of length 10.0 cm in the arm of movable mirror (as shown in the figure).



- Assuming the cell is filled with air at 1 atm which has an index of refraction $n = 1.00025$. Find the number of fringes moving across a line in her field of view if Linda slowly pumps out the air in the cell.

- (a) 413. (b) 41.3 (c) 165. (d) 16.5. (e) none of the above.

40. Which of the following functions represents traveling waves moving in the positive x direction? (a) $A \cos((kx + \omega t)^2)$. (b) $A \cos((kx)^2 - (\omega t)^2)$.
 (c) $A \sin(\omega t) \cos(kx)$. (d) $A \exp(-(x - vt)^2)$. (e) none of the above.