

參考用

本試題卷共有單選題 20 題，每題 5 分。

Planck constant  $h = 6.623 \times 10^{-34} \text{ J}\cdot\text{s}$ , speed of light  $c = 3.00 \times 10^8 \text{ m/s}$ , elementary charge  $e = 1.60 \times 10^{-19} \text{ C}$

$$\int \frac{dx}{\sqrt{x^2 \pm d^2}} = \ln \left| x + \sqrt{x^2 \pm d^2} \right| + c, \quad \int \frac{dx}{x^2 + d^2} = \tan^{-1} \frac{x}{d} + c$$

1. As shown in Fig. 1, the mass of block 1 is  $m_1$ , and the mass of block 2 is  $m_2$ , where  $m_1 < m_2$ . The radius and mass of the frictionless pulley are  $R$  and  $M$ , respectively, so the rotational inertia is  $MR^2/2$ . The pulley is fastened to the ceiling. The massless cord cannot slip on the pulley. The system is released from rest. The torque  $\tau$  on the pulley and the tension  $T_2$  are

- (a)  $\frac{(m_2 - m_1)MgR}{2m_1 + 2m_2 - M}$ ,  $\frac{(4m_1m_2 - m_2M)g}{2m_1 + 2m_2 - M}$  (b)  $\frac{(m_2 - m_1)MgR}{m_1 + m_2 + M}$ ,  $\frac{(4m_1m_2 + m_2M)g}{m_1 + m_2 + M}$  (c)  $\frac{(m_2 - m_1)MgR}{2m_1 + 2m_2}$ ,  $\frac{(4m_1m_2 + m_2M)g}{2m_1 + 2m_2}$   
 (d)  $\frac{2(m_2 - m_1)MgR}{2m_1 + 2m_2 + M}$ ,  $\frac{(4m_1m_2 + m_2M)g}{2m_1 + 2m_2 + M}$  (e)  $\frac{(m_1 - m_2)MgR}{2m_1 + 2m_2 + M}$ ,  $\frac{(4m_1m_2 + m_1M)g}{2m_1 + 2m_2 + M}$

2. For the same system shown in Fig. 1, which statement shown below is correct?

- (a) The quantities of the acceleration of block 1 and block 2 are different. (b) The system's center of mass won't move at all.  
 (c)  $T_1$  is smaller than  $T_2$ . (d) The system's angular momentum will be conserved. (e) The system's kinetic energy is equal to the sum of the kinetic energies of  $m_1$  and  $m_2$ .

3. A particle of mass  $m$  located at a distance  $d$  from one end of a uniform rod, as in Fig. 2. The mass of the rod is  $M$ , and the length is  $L$ . Find the "escape speed" of the particle.

- (a)  $\sqrt{\frac{2GM}{L} \ln\left(\frac{L + \sqrt{L^2 + d^2}}{d}\right)}$  (b)  $\sqrt{\frac{2GM}{d}}$  (c)  $\sqrt{\frac{2GMm}{d}}$  (d)  $\sqrt{\frac{2GM}{L} \tan^{-1}\left(\frac{L}{d}\right)}$  (e)  $\sqrt{\frac{2GM}{L} \left(\frac{L + \sqrt{L^2 + d^2}}{d}\right)}$

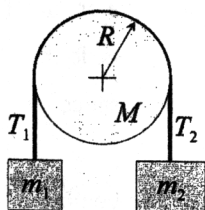


Fig. 1

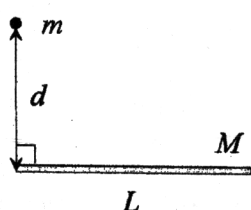


Fig. 2




Fig. 3

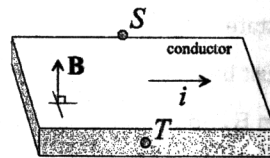


Fig. 4

4. A long straight wire is in the plane of a loop wire, as shown in Fig. 3. The straight wire initially carries no current. While the current  $i$  is smoothly increasing from zero, the current in the rectangle loop is

- (a) zero (b) clockwise (c) counterclockwise (d) clockwise in the left side and counterclockwise in the right side  
 (e) counterclockwise in the left side and clockwise in the right side.

5. The current  $i$  is from left to right in the conductor as shown in Fig. 4. The magnetic field  $\mathbf{B}$  is upward and point  $S$  is at a higher potential than point  $T$ . The charge carriers are (a) positive (b) neutral (c) negative (d) absent (e) unable to be identified.

6. Two far apart charged metal spheres of radius  $R_1$  and  $R_2$  are connected by a long wire in electrostatic equilibrium. The electric potentials and the surface charge densities on them are  $V_1, V_2$  and  $\sigma_1, \sigma_2$ , respectively. Choose the correct statement.

- (a)  $V_1 > V_2, \sigma_1 > \sigma_2$  (b)  $V_1 < V_2, \sigma_1 < \sigma_2$  (c)  $V_1 = V_2, \frac{\sigma_1}{R_1} > \frac{\sigma_2}{R_2}$  (d)  $V_1 = V_2, R_1\sigma_1 = R_2\sigma_2$  (e)  $R_1V_1 = R_2V_2, \sigma_1 = \sigma_2$

7. The resistivity of pure silicon at  $20^\circ\text{C}$  is  $2.5 \times 10^3 \Omega\cdot\text{m}$ , and the temperature coefficient of resistivity is  $-70 \times 10^{-3} \text{ K}^{-1}$ . What's the resistivity of pure silicon at  $30^\circ\text{C}$ ? (a)  $1.8 \times 10^3 \Omega\cdot\text{m}$  (b)  $-4.25 \times 10^3 \Omega\cdot\text{m}$  (c)  $-0.75 \times 10^3 \Omega\cdot\text{m}$

(d)  $4.25 \times 10^3 \Omega\cdot\text{m}$  (e)  $0.75 \times 10^3 \Omega\cdot\text{m}$

8. As the circuit in Fig. 5, the resistance of each resistor is  $2 \Omega$ . The currents  $i_1, i_2$  through the batteries are (a)  $+0.66 \text{ A}, -0.66 \text{ A}$  (b)  $+0.5 \text{ A}, 0 \text{ A}$  (c)  $+1.0 \text{ A}, +0.5 \text{ A}$  (d)  $+0.66 \text{ A}, -0.5 \text{ A}$   
 (e)  $-0.66 \text{ A}, 0 \text{ A}$ .

9. The electric flux of  $\mathbf{E} = (2, 3, 6) \text{ N/C}$  through one  $2.0 \text{ m}^2$  area on  $xy$  plane is

- (a)  $6 \text{ N}\cdot\text{m}^2/\text{C}$  (b)  $4 \text{ N}\cdot\text{m}^2/\text{C}$  (c)  $9 \text{ N}\cdot\text{m}^2/\text{C}$  (d)  $3 \text{ N}\cdot\text{m}^2/\text{C}$  (e)  $12 \text{ N}\cdot\text{m}^2/\text{C}$

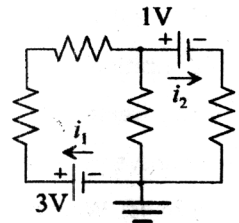


Fig. 5

注意：背面有試題

10. In an "adiabatic" process, which statement is correct about the heat  $Q$ , the work done  $W$ , and the internal energy  $\Delta E_{\text{int}}$  in an ideal gas system?  
 (a)  $Q > 0, W > 0, \Delta E_{\text{int}} = 0$  (b)  $Q < 0, W > 0, \Delta E_{\text{int}} = 0$  (c)  $Q = 0, W = \Delta E_{\text{int}}$  (d)  $Q = 0, W = -\Delta E_{\text{int}}$  (e) None in above.
11. As shown in Fig. 6, an electrical hot plate inside a chamber generates heat in a rate of  $P = 100$  W. One of the chamber walls is made of copper with thermal conductivity  $k_{\text{Cu}} = 401$  W/m.K. The other walls are fiber wool which are nearly thermal insulated with  $k_{\text{fiber}} = 0.048$  W/m.K. The copper wall thickness is 3 mm, and the cross-section area is  $0.1$  cm<sup>2</sup>. If the temperature outside the chamber is  $T_L = 20$  °C, in condition of thermal equilibrium, the temperature  $T_H$  inside the chamber is  
 (a) 24.8 °C (b) 34.8 °C (c) 58.8 °C (d) 84.8 °C (e) 94.8 °C.
12. As shown in Fig. 7, a moving point source  $S$  with speed  $v = 20$  m/s heading toward the wall on the right generates sound wave with frequency 50 KHz. The speed of sound in air is 340 m/s. What's the beat frequency heard at  $D$ .  
 (a) 2.95 KHz (b) 1.45 KHz (c) 0.50 KHz (d) 5.90 KHz (e) 8.53 KHz.

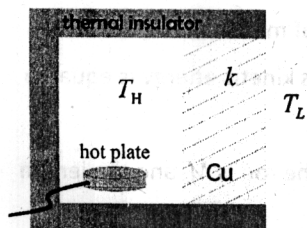


Fig. 6

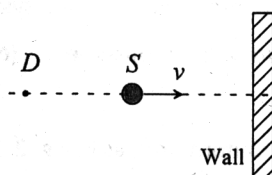


Fig. 7

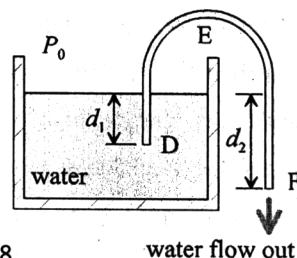


Fig. 8

13. As shown in Fig. 8, water flows out from  $F$  in speed  $v$  (m). The density of water is  $\rho$  (kg/m<sup>3</sup>) and negligible viscosity. The cross-sectional area of the tube is  $A$  (m<sup>2</sup>), which is much smaller than that of tank. The atmospheric pressure is  $P_0$  (Pa or N/m<sup>2</sup>). Which statement is correct?  
 (a)  $v = \sqrt{2gd_2}$ . (b) Pressure at  $D$  is  $\rho gd_1$ . (c) If the water flows, pressure at  $E$  inside the tube must be zero. (d) Water flows only when  $d_2 > d_1$ . (e) Whether water flows or not is independent of the distance between  $E$  and the upper surface of water.
14. The average speed  $v$  and molecular diameter  $d$  of five ideal gases are given below. The number of molecules per unit volume is the same for all of them. Which gas has the greatest mean free path?  
 (a)  $v = 4v_0$  and  $d = d_0/5$  (b)  $v = 2v_0$  and  $d = d_0/3$   
 (c)  $v = v_0$  and  $d = d_0$  (d)  $v = v_0/2$  and  $d = 3d_0$  (e)  $v = v_0/4$  and  $d = 5d_0$ .
15. Which statement about electromagnetic wave in vacuum is correct? ( $\vec{E}$  and  $\vec{B}$  are the electric field and magnetic field of the EM wave, respectively.)  
 (a) The traveling direction is determined by  $\vec{B} \times \vec{E}$ . (b) Both  $\vec{E}$  and  $\vec{B}$  oscillate sinusoidally but they travel in opposite directions. (c)  $\vec{E}$  and  $\vec{B}$  are in phase. (d) EM wave is a longitudinal wave. (e)  $\vec{E}$  and  $\vec{B}$  can be separated by polarizer.
16. The focal length of a thin convex lens (凸透鏡) is  $f_{\text{air}}$  in air, or  $f_{\text{water}}$  in water. Which statement is correct?  
 (a) The focal length of a lens is determined by the surface curvatures only, so  $f_{\text{air}}$  is equal to  $f_{\text{water}}$ . (b)  $f_{\text{air}}$  is smaller than  $f_{\text{water}}$ . (c) It will be possible that a concave lens (凹透鏡) in water becomes a convex lens. (d) Both  $f_{\text{air}}$  and  $f_{\text{water}}$  are independent on the frequency of incident light. (e) None in above.
17. The uncertainty in position of an electron in a certain state is  $5 \times 10^{-10}$  m. The uncertainty in its momentum (in kg-m/s) must be:  
 (a) less than  $10^{-26}$  (b) less than  $10^{-22}$  (c) greater than  $10^{-24}$  (d) greater than  $10^{-22}$  (e) greater than  $10^{-20}$ .
18. A stopping potential of 4.2 V is needed for radiation whose wavelength is 200 nm. The work function in eV of the material is  
 (a) 4 (b) 3 (c) 5 (d) 6 (e) 2.
19. Polarization experiments provide evidence that  
 (a) light is a longitudinal wave. (b) light is a stream of particles. (c) light is a transverse wave. (d) the polarized light is monochromatic. (e) polarized light propagates faster than un-polarized light.
20. A transverse wave travels along a string according to the equation  $y(x, t) = 0.05 \sin(0.4\pi x + 3\pi t + \pi/3)$ . ( $x, y$  in meters,  $t$  in seconds). What is the speed of propagation of the wave, in m/s?  
 (a) 1.2 (b) 4.0 (c) 7.5 (d) 9.0 (e) 12.0

注意：背面有試題

參考用